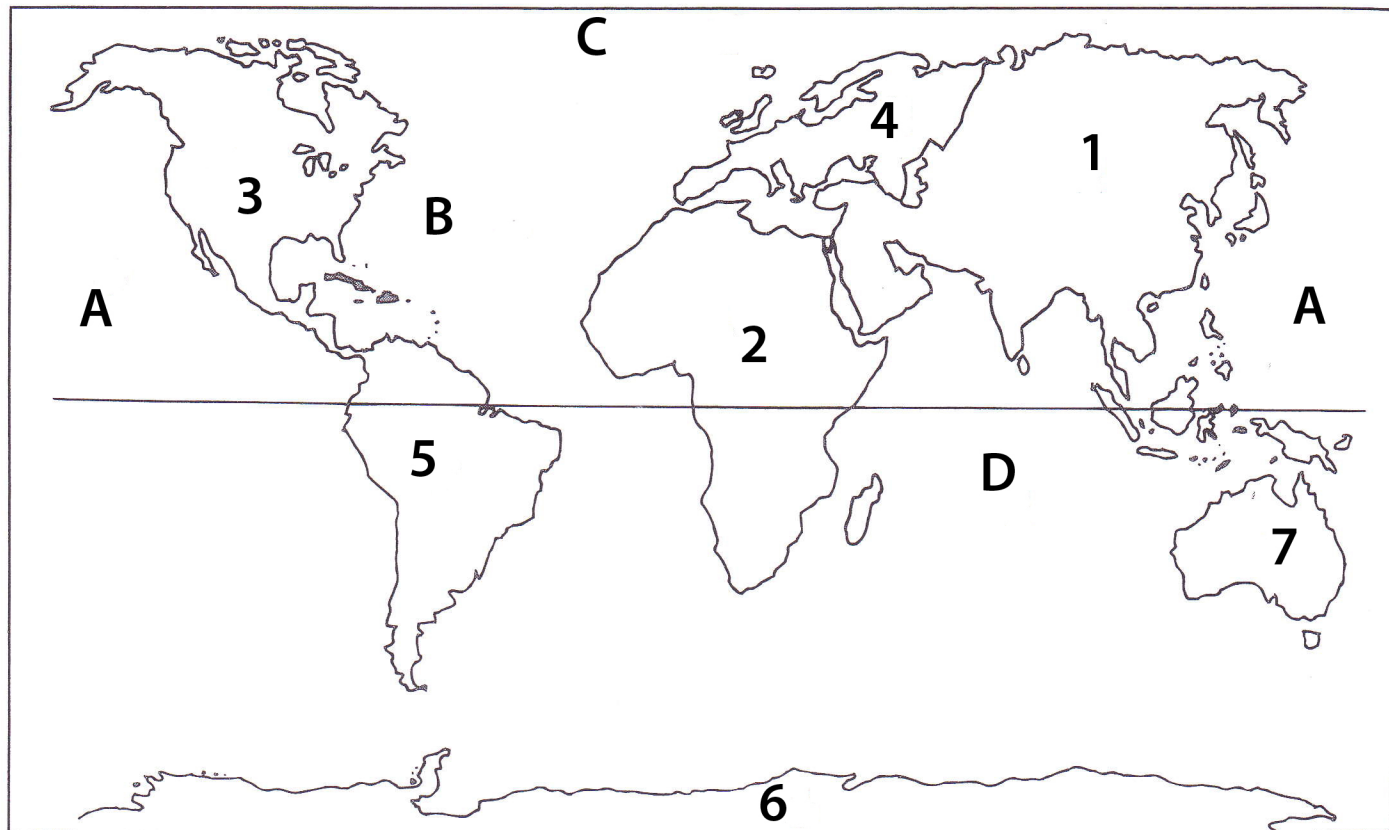


Name: \_\_\_\_\_

Date: \_\_\_\_\_ Per: \_\_\_\_\_ Log#: \_\_\_\_\_

Map and Geography Review Sheets

## Continents & Oceans Self Practice Quiz



Name the continents as numbered on the map.

1. \_\_\_\_\_
2. \_\_\_\_\_
3. \_\_\_\_\_
4. \_\_\_\_\_
5. \_\_\_\_\_
6. \_\_\_\_\_
7. \_\_\_\_\_

Name the oceans as lettered on the map.


- A. \_\_\_\_\_
- B. \_\_\_\_\_
- C. \_\_\_\_\_
- D. \_\_\_\_\_

**\*Remember: Spelling Counts!!!**

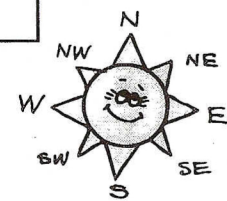


# Globe Puzzle

Directions: Use a world map to solve this puzzle.



- Europe
- Australia
- Africa
- Asia
- Pacific
- Indian
- Atlantic
- Arctic
- equator
- axis
- north
- south
- continents
- North America
- South America
- Antarctica



**Across:**

- 2. U.S.A.'s continent
- 3. southernmost continent
- 5. opposite north
- 6. continent west of Asia
- 8. divides the earth into northern and southern hemispheres
- 9. island continent
- 11. earth "spins" on it
- 12. largest ocean
- 13. ocean east of Africa

**Down:**

- 1. large continent northeast of Africa
- 2. direction of the North Pole from the equator
- 4. continent between the Atlantic and Indian Oceans
- 5. Brazil's continent
- 7. land masses of earth
- 10. ocean east of North America
- 11. northernmost ocean